





Name: _____ Datum: _____ Klasse: _____

1) 
 $6 = 1 + \underline{\quad}$



 $6 = 3 + \underline{\quad}$


2) 
 $6 = 2 + \underline{\quad}$


 $6 = \underline{\quad} + 3$

3) 
 $6 = 4 + \underline{\quad}$



 $6 = 5 + \underline{\quad}$


4) 
 $2 + \underline{\quad} = 6$



 $4 + \underline{\quad} = 6$


5) 
 $0 + \underline{\quad} = 6$


 $1 + \underline{\quad} = 6$

6) 
 $\underline{\quad} + 5 = 6$


 $\underline{\quad} + 2 = 6$


7) 
 $\underline{\quad} + \underline{\quad} = 6$



 $\underline{\quad} + \underline{\quad} = 6$

8) 
 $2 + \underline{\quad} + \underline{\quad} = 6$


 $\underline{\quad} + 1 + \underline{\quad} = 6$

Diese Aufgaben schaffst du bestimmt auch noch.

9) 
 $\underline{\quad} + \underline{\quad} + \underline{\quad} = 6$


 $\underline{\quad} + \underline{\quad} + \underline{\quad} = 6$

10) 
 $\underline{\quad} + \underline{\quad} + \underline{\quad} = 6$


 $\underline{\quad} + \underline{\quad} + \underline{\quad} = 6$