






Name: _____ Datum: _____ Klasse: _____

1)  
 $7 = 3 + \underline{\quad}$



 
 $7 = 4 + \underline{\quad}$



2)  
 $7 = 2 + \underline{\quad}$


 
 $7 = 5 + \underline{\quad}$

3)  
 $7 = 1 + \underline{\quad}$



 
 $7 = 6 + \underline{\quad}$



4)  
 $2 + \underline{\quad} = 7$



 
 $4 + \underline{\quad} = 7$



5) 
 $0 + \underline{\quad} = 7$


 
 $1 + \underline{\quad} = 7$




6)  
 $\underline{\quad} + 1 = 7$

 
 $5 + \underline{\quad} = 7$




7)  
 $\underline{\quad} + \underline{\quad} = 7$




 
 $\underline{\quad} + \underline{\quad} = 7$




8)   
 $\underline{\quad} + 2 + \underline{\quad} = 7$




  
 $3 + \underline{\quad} + \underline{\quad} = 7$

Diese Aufgaben schaffst du bestimmt auch noch.

9)   
 $\underline{\quad} + \underline{\quad} + \underline{\quad} = 7$

  
 $\underline{\quad} + \underline{\quad} + \underline{\quad} = 7$

10)   
 $\underline{\quad} + \underline{\quad} + \underline{\quad} = 7$

  
 $\underline{\quad} + \underline{\quad} + \underline{\quad} = 7$