




Name: \_\_\_\_\_ Datum: \_\_\_\_\_ Klasse: \_\_\_\_\_

1)   
 $9 = 3 + \underline{\quad}$


  
 $9 = 7 + \underline{\quad}$


2)   
 $9 = 2 + \underline{\quad}$


  
 $9 = 6 + \underline{\quad}$

3)   
 $9 = 5 + \underline{\quad}$


  
 $9 = 7 + \underline{\quad}$


4)   
 $3 + \underline{\quad} = 9$


  
 $4 + \underline{\quad} = 9$

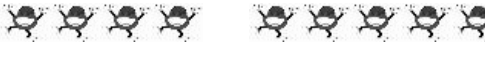
5)   
 $0 + \underline{\quad} = 9$

  
 $8 + \underline{\quad} = 9$

6)   
 $6 + \underline{\quad} = 9$

  
 $4 + \underline{\quad} = 9$


7)   
 $\underline{\quad} + 6 = 9$

  
 $\underline{\quad} + 5 = 9$


8)   
 $\underline{\quad} + \underline{\quad} + \underline{\quad} = 9$

  
 $\underline{\quad} + \underline{\quad} + \underline{\quad} = 9$

Diese Aufgaben schaffst du bestimmt auch noch.

9)   
 $\underline{\quad} + \underline{\quad} + \underline{\quad} = 9$

  
 $\underline{\quad} + \underline{\quad} + \underline{\quad} = 9$

10)   
 $\underline{\quad} + \underline{\quad} + \underline{\quad} = 9$

  
 $\underline{\quad} + \underline{\quad} + \underline{\quad} = 9$