

Name: _____ Datum: _____ Klasse: _____

1)    
 $10 = 3 + \underline{\hspace{2cm}}$ $10 = 7 + \underline{\hspace{2cm}}$

2)    
 $10 = 1 + \underline{\hspace{2cm}}$ $10 = 6 + \underline{\hspace{2cm}}$

3)    
 $10 = 5 + \underline{\hspace{2cm}}$ $10 = 8 + \underline{\hspace{2cm}}$

4)    
 $4 + \underline{\hspace{2cm}} = 10$ $9 + \underline{\hspace{2cm}} = 10$







5)   
 $0 + \underline{\hspace{2cm}} = 10$ $2 + \underline{\hspace{2cm}} = 10$







6)    
 $5 + \underline{\hspace{2cm}} = 10$ $4 + \underline{\hspace{2cm}} = 10$

7)    
 $\underline{\hspace{2cm}} + 7 = 10$ $\underline{\hspace{2cm}} + 5 = 10$

8)      
 $\underline{\hspace{2cm}} + \underline{\hspace{2cm}} + \underline{\hspace{2cm}} = 10$ $\underline{\hspace{2cm}} + \underline{\hspace{2cm}} + \underline{\hspace{2cm}} = 10$

Diese Aufgaben schaffst du bestimmt auch noch.

9)      
 $\underline{\hspace{2cm}} + \underline{\hspace{2cm}} + \underline{\hspace{2cm}} = 10$ $\underline{\hspace{2cm}} + \underline{\hspace{2cm}} + \underline{\hspace{2cm}} = 10$

10)      
 $\underline{\hspace{2cm}} + \underline{\hspace{2cm}} + \underline{\hspace{2cm}} = 10$ $\underline{\hspace{2cm}} + \underline{\hspace{2cm}} + \underline{\hspace{2cm}} = 10$